

LA VILLE ROMAINE ET SES BÂTIMENTS

<http://education.francetv.fr/serious-game/cite-romaine-o1711>


Indique le nom des bâtiments romains représentés ci-dessous :



.....



.....




.....



.....



.....



.....



.....



.....















.....



.....



.....

CONSTRUCTION	A QUOI ELLE SERVAIT ?
	<hr/> <hr/> <hr/>
	<hr/> <hr/> <hr/>
	<hr/> <hr/> <hr/>
	<hr/> <hr/> <hr/>
	<hr/> <hr/> <hr/>
	<hr/> <hr/> <hr/>
	<hr/> <hr/> <hr/>
	<hr/> <hr/> <hr/>
	<hr/> <hr/> <hr/>
	<hr/> <hr/> <hr/>
	<hr/> <hr/> <hr/>
	<hr/> <hr/> <hr/>