

1. Complète les case vides.

0	1	2	3	4	5	6	7	8	9
10	11		13	14	15		17	18	19
20		22	23	24	25		27		29
30	31	32		34	35	36		38	39
	41		43	44		46	47	48	49
50	51	52	53		55	56		58	
60		62	63	64				68	69
	71		73		75		77		
80		82		84		86		88	

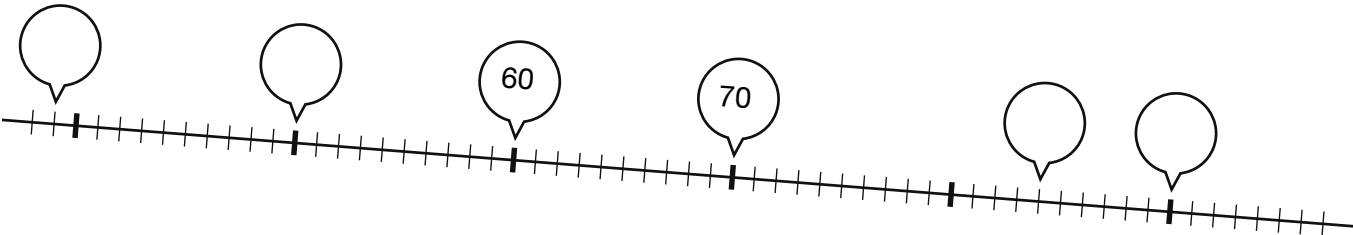
/5pts

2. Complète les cases encadrées.

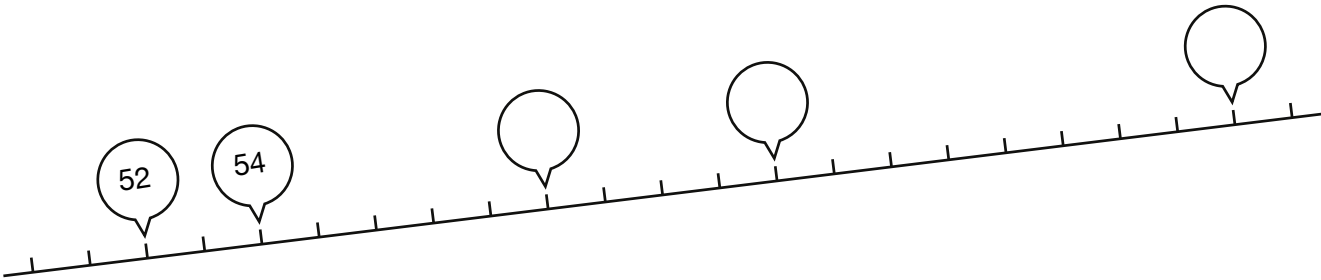
0	1	2	3	4	5	6	7	8	9
10									
20									
30									
40									
50									
60									
70									
80									
90									

/5pts

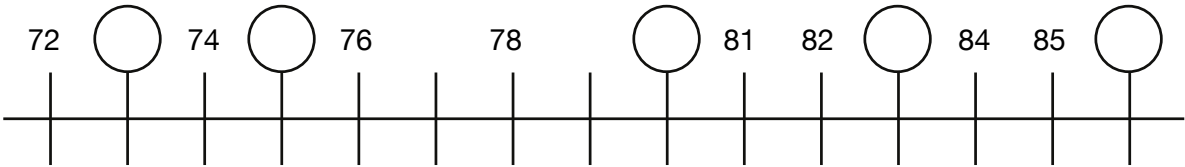
3. Complète les bulles.



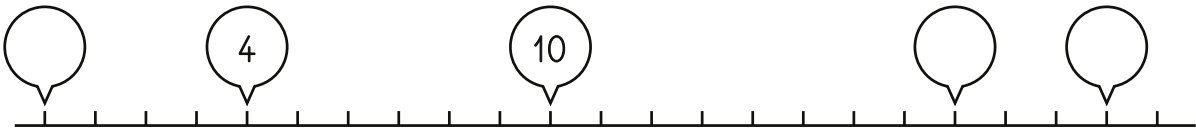
/2pts



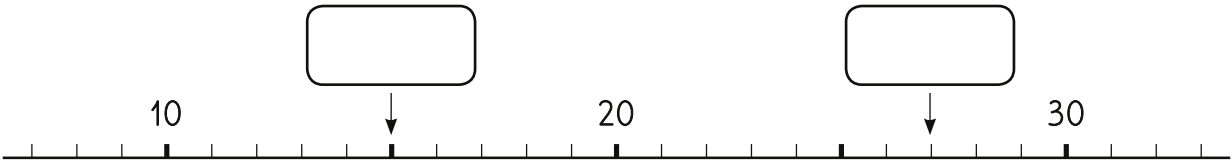
/1,5pts



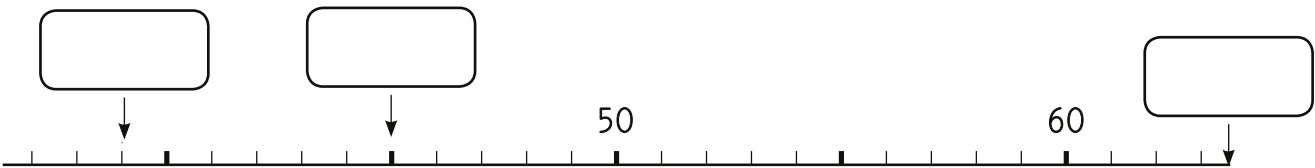
/2,5pts



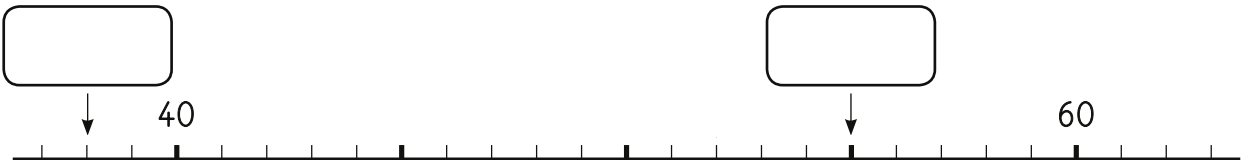
/1,5pts



/1pt



/1,5pts



/1pt

4. Relie les points de 1 à 100

